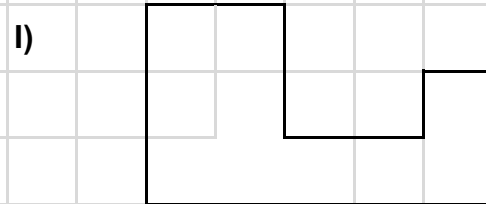
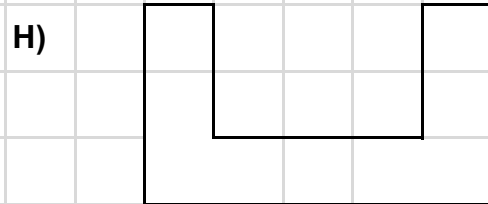

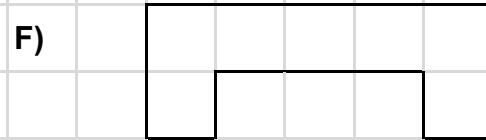


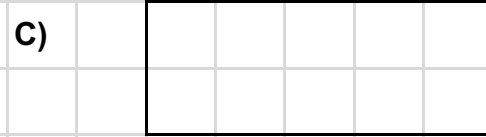
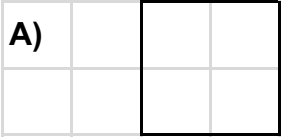


# Ninja Maths / YEAR 4 / Basic Geometry / WORKOUT 2

Calculate the perimeter of these shapes. Each square is 1cm (not to scale)



A) 8cm

B) 12cm

C) 14cm

D) 10cm

E) 14cm

F) 16cm

G) 16cm

H) 20cm

I) 18cm